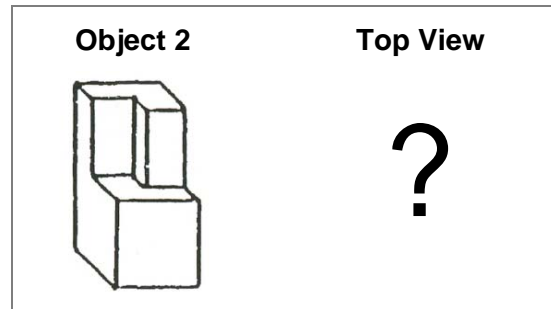
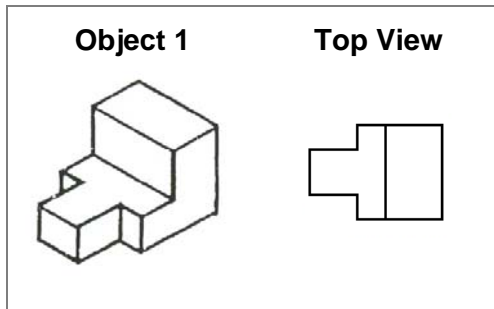


SATEC @ W.A. PORTER CI – Science/Technology Sample Questions

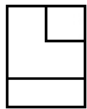
Multiple Choice.

Choose the best answer.

1. What will be the top view for the second object?



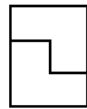
A.



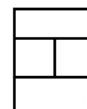
B.



C.



D.



E.



2. This is the gradual process in which a liquid changes into a gas or vapour.

a) evaporation

c) condensation

b) melting

d) sublimation